

FUNCTIONAL SKILLS MATHS LEVEL 1

PAPER 1

Please write clearly in block capitals.

Centre number

--	--	--	--

Candidate number

--	--	--	--

Surname

Forename(s)

Candidate signature

Functional Skills Level 1

MATHEMATICS

Section A: Non-Calculator Paper

Section B: Calculator Paper

Paper A/B

Time allowed: 30 minutes / 1 hour 30 minutes

Materials

For this paper you must have:

- mathematical instruments.

You **must not** use a calculator for section A.

You may use a calculator for section B.

Instructions

- Use black ink or black ball-point pen. Draw diagrams in pencil.
- Answer all questions.
- You must answer the questions in the spaces provided. Do not write outside the box around each page or on blank pages.
- Do all rough work in this book. Cross through any work you do not want to be marked.
- State the units of your answer where appropriate.

Information

- The marks for questions are shown in brackets.
- The maximum mark for section A is 15 and section B is 45.
- The maximum mark for this paper is 60.
- You may ask for more answer paper, graph paper and tracing paper.
These must be tagged securely to this answer book.

Advice

- In all calculations, show clearly how you work out your answer.

SECTION A : Non-Calculator

**Answer ALL questions.
Write your answers in the spaces provided.**

1 Work out $19^2 - 3 \times 5 + 2$

[2 marks]

Answer _____

2 Calculate $17.89 + 23.47$

[1 mark]

Answer _____

3 Calculate $23.1 \div 1000$

[1 mark]

Answer _____

Turn over for next question

- 4 Jeffrey records the ages of some people that attend his gym.

26 15 28 18 19 43 53 61 48
28 34 42 23 25 22 31 20 19
23 31 43 50 23 34 27 39 16


Fill in this table for Jeffrey's data.

Age	Tally	Frequency
0-19		
20-29		
30-39		
40-49		
50 or over		

Question continues on next page



4 cont. Use this table to plot a bar chart for this data on the graph paper below.




[5 marks]

Turn over for next question

- 5 Jeffrey's gym has a swimming pool. Jeffrey draws a scale drawing of the swimming pool on the square grid below.

What is the actual area of the swimming pool?



[3 marks]

Answer _____

Turn over for next question

- 6 There are 120 members that attend Jeffrey's gym in total. The gym offer either a silver membership or a gold membership. The ratio of people on the silver membership to gold membership is 3: 5.

How many people are there on each membership?

[2 marks]

Answer _____

- 7 Jeffrey has a bag of various sports balls. He has 7 footballs, 3 rugby balls and 6 tennis balls.

What is the probability of Jeffrey picking a football out of the bag at random?

[1 mark]

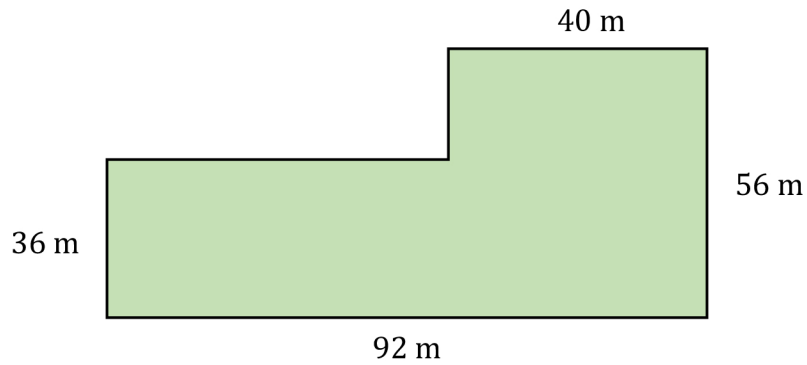
Answer _____

End of Section A

SECTION B : Calculator

**Answer ALL questions.
Write your answers in the spaces provided.**

- 8 David is training for a charity run. As part of David's training, he runs around a field seen below. He aims to run at least 5 km.



How many **full** laps of the field will he need to run?

Assume that he can only complete **full** laps.

[3 marks]

Answer _____

Turn over for next question

- 9 David records how long it takes him to run 5 km on 5 days in a week. He does this for 3 weeks.

He records his times in the table below.

	Time (minutes)				
	Monday	Tuesday	Wednesday	Thursday	Friday
Week 1	29	32	30	33	32
Week 2	27	29	34	30	28
Week 3	28	30	31	30	33

In which week were the range of his times the greatest?

Show your working.

[2 marks]

Answer _____

- 10 David buys a new pair of running shoes to use for his charity run. The price of the pair of running shoes is £65, but David has a 20% off voucher.

How much will the running shoes cost David?

[1 mark]

Answer _____

Turn over for next question

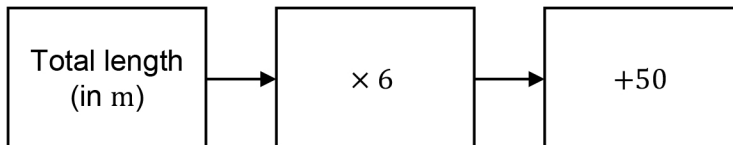
- 11** There are 24 members of a church. Two thirds of the members are women.
How many of the church members are women?

[1 mark]

Answer _____

- 12** Delia wants to decorate her square house by putting Christmas lights on two of its sides. Her house is 17 m wide.

To calculate the number of lights she needs, she uses this rule:



Lights come in boxes of 80.

Each box costs £15.99

Calculate how much it would cost Delia to decorate her house in this way.

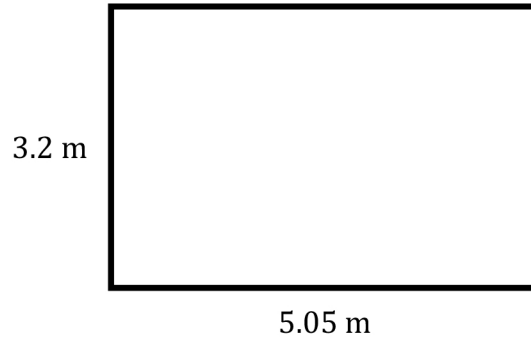
[4 marks]

Answer _____

Turn over for next question

14 Bob wants to varnish his kitchen floor.

The diagram below shows the dimensions of Bob's kitchen floor.



Bob is going to give the kitchen floor 2 coats of varnish.

1 litre of varnish that Bob buys will cover 5.6 m^2 of floor.

The varnish comes in 2 litre tins, costing £14.95 per tin.

Calculate how much it would cost Bob to varnish his floor.

[5 marks]

Answer _____

Turn over for next question

16

Billy weighs 76 kg.

Billy claims that he weighs more than the mean weight of his friends.

The weight of his friends can be seen in the table below.

Friend	Weight (kg)
Kyle	75 kg
Chloe	70 kg
Katie	68 kg
Ari	80 kg
Sean	78 kg
Mark	76 kg

Is Billy correct?


Show your working.

[3 marks]

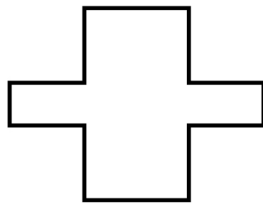
Answer _____

Turn over for next question

- 17 Which of these shapes have exactly 2 lines of symmetry?



A



B



C

[2 marks]

Answer _____

- 18 Monique eats $\frac{1}{4}$ of a pizza and Ahmed eats 28% of the same pizza.

Who eats the most pizza?

Show your working.

[2 marks]

Answer _____


Turn over for next question

19 Some Army cadets are split up into 3 teams.

The table below shows these results.

Team	Cadets
Alpha	40
Bravo	35
Charlie	15

Complete the pie chart to display this data.



[3 marks]

Answer _____

Turn over for next question

- 20 Mary uses the following mileage chart to see the distances between various cities.

Leicester			
52	Lincoln		
26	36	Nottingham	
61	47	37	Sheffield

Mary wants to drive from Sheffield to Nottingham, and then from Nottingham to Leicester. She has enough petrol in her car to travel 70 miles.

Does she have enough petrol to do these journeys?

Show your working.

[2 marks]

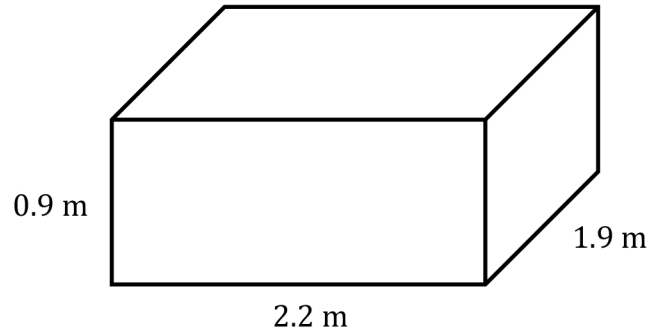
Answer _____

Turn over for next question

21

Wendy has bought a hot tub for her garden and wants to fill it with water.

A diagram of the hot tub can be seen below.



She is going to use a hose pipe that will fill the hot tub with 0.026 m^3 of water per minute.

Calculate how long it will take Wendy to fill the hot tub using this hose pipe.

Give your answer to the nearest minute.

[4 marks]

Answer _____

Turn over for next question

22

Denise works at a Café and works as a cleaner. Her current working hours are listed in the table below.

Day	Job	Shift times	Breaks
Monday	Café	07:30 – 13:00	30 mins
Tuesday	Café	09:00 – 15:00	30 mins
Wednesday	Day Off		
Thursday	Cleaner	10:00 – 16:00	45 mins
Friday	Café	07:00 – 14:00	45 mins
Saturday	Day Off		
Sunday	Cleaner	11:30 – 14:30	-

Denise is not paid for her break times and she earns £9.10 per hour working at the Café. She earns 20% more per hour working as a cleaner.

If Denise works as a cleaner on a weekend, she gets paid an additional £20.

Work out how much Denise earns in a week.

[5 marks]

Answer _____

End of Section B