

Please write clearly in block capitals.

Centre number

--	--	--	--	--

Candidate number

--	--	--	--

Surname

Forename(s)

Candidate signature

Functional Skills Certificate

FUNCTIONAL MATHEMATICS

Level 1

Monday 15 January 2018


Morning

Time allowed: 1 hour 30 minutes

Materials

For this paper you must have:

- a calculator
- mathematical instruments
- a copy of the Data Book (Examination) (enclosed).



Instructions

- Use black ink or black ball-point pen. Draw diagrams in pencil.
- Answer **all** questions.
- You must answer the questions in the spaces provided. Do not write outside the box around each page or on blank pages.
- Do all rough work in this book. Cross through any work you do not want to be marked.
- State the units of your answer where appropriate.

Information

- The marks for questions are shown in brackets.
- The maximum mark for this paper is 60.
- You may ask for more answer paper, graph paper and tracing paper. These must be tagged securely to this answer book.
- Evidence of checking is specifically assessed in Questions 1(a) and 2(b). These questions are indicated with a †.

Advice

- In all calculations, show clearly how you work out your answer.

For Examiner's Use	
Question	Mark
1	
2	
3	
4	
TOTAL	



J A N 1 8 4 3 6 7 0 1

Answer **all** questions in the spaces provided.

1 Minibus

There is a **data sheet** for Minibus.

Samir wants to hire some minibuses to go to a hockey match.

He needs enough minibuses to carry 90 people.

†1 (a) Each minibus can carry 15 people.

How many minibuses does Samir need to hire?

[2 marks]

Check your answer.

Show how you have done your check.

[1 mark]

1 (b) Each minibus can travel 24 miles for one gallon of petrol.

Each minibus travels 60 miles.

How many gallons of petrol will **each** minibus use?

[2 marks]



10 friends live in Bristol.

They are going to Truro for a weekend.

They want to hire a minibus to get from Bristol to Truro and back.

- 1 (c) How many miles in total is it from Bristol to Truro and back?

[2 marks]

- 1 (d) The 10 friends look at this advert.

Minibus hire

£21 per day

plus

70p per mile

They hire the minibus for 3 days.

They travel from Bristol to Truro and back.

The friends share the cost equally between them.


How much will each friend pay?

[5 marks]

Turn over ►



- 1 (e) On the journey they come to a low bridge.



The height of the minibus with a loaded roof rack is 3.2 metres.

Show that the minibus can pass under the bridge.

[2 marks]

14



2 Guide Dogs in training

Guide Dogs train at a centre each day from Monday to Friday.
In the evenings and at weekends, people look after them at home.



Sarah looks after Buddy.

- 2 (a)** Sarah takes Buddy from her home to the centre.
She then travels to work.
Sarah makes these notes.

Home to centre	quarter of an hour
At centre	5 minutes
Centre to work	35 minutes

Sarah needs to arrive at work by 8.45 am

Work out the **latest** time that she can leave home.

[4 marks]

Turn over ►



The daily amount of food for a dog depends on the weight of the dog.

Weight of dog	Daily amount of food
26 kg	362 g
27 kg	372 g
28 kg	382 g
29 kg	392 g
30 kg	402 g
31 kg	412 g
32 kg	422 g
33 kg	432 g

Dogs get two feeds each day.

Morning feed Half the daily amount

Evening feed Half the daily amount

†2 (b) Buddy weighs 28 kg

How much food does Buddy get in his morning feed?

[2 marks]

Check your answer.

Show how you have done your check.

[1 mark]



2 (c)



Tim looks after Ella.

Ella gets 216 grams in her morning feed.

Tim uses a cup to measure out the feed.

1 cup holds 96 grams.

Tim says,

“I need to measure out between 2 and $2\frac{1}{2}$ cups.”

Is he correct?

You **must** show your working.


[3 marks]

Question 2 continues on the next page

Turn over ►



- 2 (d)** At the centre the dogs are put into one of five cages.
There are three small cages and two large cages.



Up to 2 dogs can be put in each small cage.

Up to 3 dogs can be put in each large cage.

These dogs need to be put in the cages.


Dog	Information	Dog	Information
Axel	With Gina	Frank	With only one other dog
Buddy	With Ella	Gina	Not with Cora or Iggy
Cora	Not on her own	Hugo	Not on his own
Dax	With only one other dog	Iggy	Not on his own
Ella	With Hugo	Jake	On his own

On the next page show **one** possible way the dogs can be put in the cages.


[5 marks]



Practise on this diagram.



Put your answer on this diagram.



3 Dance Show

Susan runs a dance school.



Susan

The students at my dance school are in a show.


Each dancer in the show wears a costume with a sash.

Susan is making the sashes.

Each sash is a rectangle 140 cm long and 20 cm wide.

Here is a scale drawing of a sash.

Scale 1 cm represents 20 cm



3 (a) Susan has a piece of material 200 cm long and 160 cm wide.

She says,


“I can make 11 sashes from this piece of material.”

Use the scale drawings below to show how she can do this.

[3 marks]


Practise on this scale drawing.

Scale 1 cm represents 20 cm

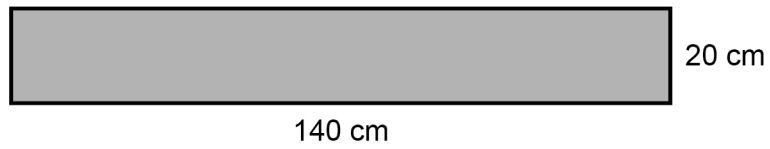


Put your answer on this scale drawing.

Scale 1 cm represents 20 cm



3 (b) Susan sews tape along the edge of each sash.



Not drawn
accurately

How many centimetres of tape does she need for 25 sashes?

[3 marks]


Turn over ►



Susan has booked a hall for the show.

Here is a seating plan for the hall.

The seats already sold for Friday are shaded.



Key: ■ Seats sold □ Seats for sale

3 (c) Chris and Mary want 2 seats for Friday.

They want the seats to be

- together in the same row
- as near to the stage as possible
- as near to the end of a row as possible.

Which seats should they choose?

Circle your answer below.

[1 mark]

A1 and A2

C8 and C9

C13 and C14

K5 and K6



3 (d) The show is on for **two** nights.
Tickets are £8.50 each.
The **total** cost of putting on the show for two nights is £960
Susan says,
 “If we sell **all** the tickets for both nights we will make **more than** £1500 profit.”
Is she correct?
You **must** show your working.

[6 marks]

13

Turn over for the next question

Turn over ►



4

Wages

There is a **data sheet** for Wages.

**Bob**

My company makes and sells clothing.

10 piece workers make T-shirts.

This list shows the number of T-shirts each worker made in one hour.

10 7 9 8 6 7 7 10 9 7

4 (a) Show that the mean number of T-shirts made per worker is 8

[2 marks]



4 (b) The workers are all 18 to 20 years old.

Bob says,

“The fair rate is 75p per T-shirt.”

Is he correct?

You **must** show your working.

[6 marks]

4 (c) All 10 piece workers make T-shirts for 2 days.

They work 6 hours each day.

The mean number of T-shirts they each make per hour is 8

Bob says,

“Altogether, they will make more than 1000 T-shirts.”

Is he correct?

You **must** show your working.

[4 marks]

Turn over ►



- 4 (d)** Bob sells 2000 skirts for £4.99 each.
Here are his costs.

Payments to piece workers	£1.64 per skirt
Materials	£1900
Postage and packaging	£705
Other costs	£1080

Bob says,
"My profit is **more than** £3000"
Is he correct?
You **must** show your working.

[6 marks]

18

END OF QUESTIONS

Copyright Information

For confidentiality purposes, from the November 2015 examination series, acknowledgements of third party copyright material will be published in a separate booklet rather than including them on the examination paper or support materials. This booklet is published after each examination series and is available for free download from www.aqa.org.uk after the live examination series.

Permission to reproduce all copyright material has been applied for. In some cases, efforts to contact copyright-holders may have been unsuccessful and AQA will be happy to rectify any omissions of acknowledgements. If you have any queries please contact the Copyright Team, AQA, Stag Hill House, Guildford, GU2 7XJ.

Copyright © 2018 AQA and its licensors. All rights reserved.

